

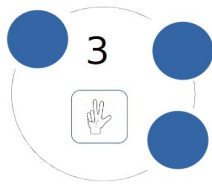
# Les colliers de perles

## Énigme Maths 50

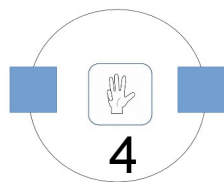


### Niveau 1 :

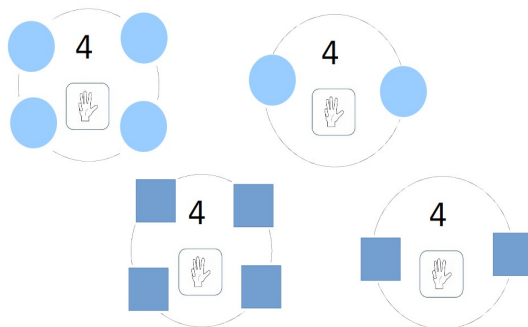
rond = 1



### Niveau 2 :

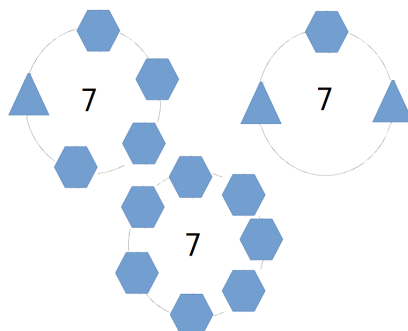


### Niveau 3 :



### Niveau 4 :

hexagone = 1, triangle = 3



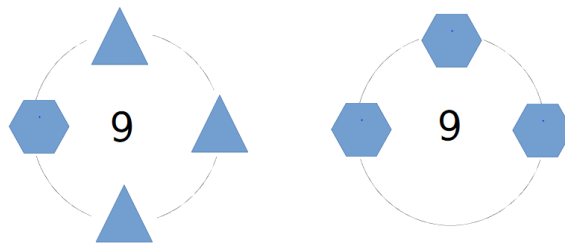
# Les colliers de perles

## Énigme Maths 50



### Niveau 4 bis :

hexagone = 3, triangle = 2



### Niveau 5 :

rond = 2, étoile = 3, pentagone : 1, cœur = 5

Le collier vaut 11

### Niveau 6 :

Le collier vaut 10.

2 solutions possibles :

étoile = 3, cœur = 1, pentagone = 2, rond = 4

et étoile = 2, cœur = 4, pentagone = 1, rond = 3

### Niveau 7 :

Le collier vaut 15

étoile = 2, cœur = 4, rond = 3, pentagone = 1, carré = 5